

Compétence : Trouver le complément à la dizaine supérieure.

Prénom .....

Date .....

## 1 Complète les égalités.



$$8 + \dots = 10$$



$$5 + \dots = 10$$



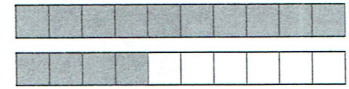
$$4 + \dots = 10$$




$$18 + \dots = 20$$



$$15 + \dots = 20$$



$$14 + \dots = 20$$



$$28 + \dots = 30$$

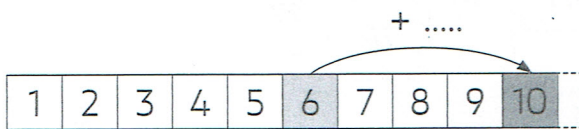


$$25 + \dots = 30$$




$$24 + \dots = 30$$

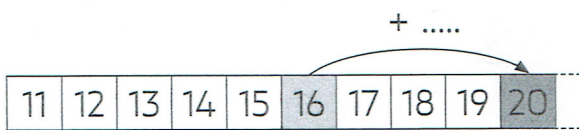
## 2 Complète.



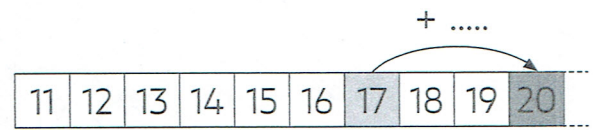
$$6 + \dots = 10$$



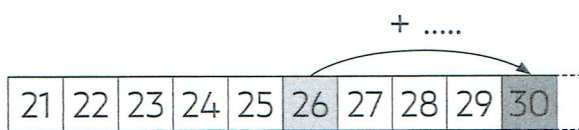
$$7 + \dots = 10$$



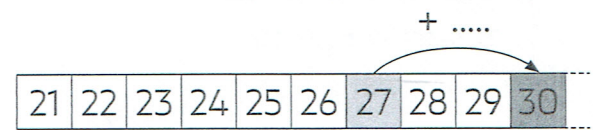
$$16 + \dots = 20$$



$$17 + \dots = 20$$



$$26 + \dots = 30$$



$$27 + \dots = 30$$